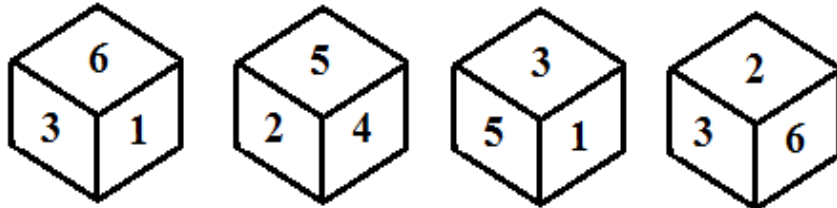


Puzzles

Dice

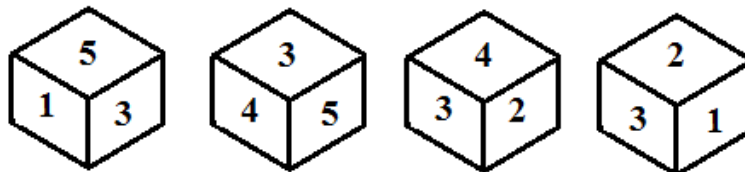
1. A dice thrown 4 times produced the following results which number will appear opposite to number 3?



- (A) 4
- (B) 5
- (C) 6
- (D) 1

Answer: (A) 4.

2. Given the following:



What number is opposite to 4?

(A) 1

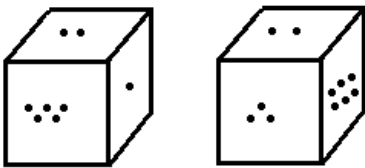
(B) 2

(C) 5

(D) 6

Answer: (A) 2.

3. Two portions of a dice are given below. When 1 is at the top, which number will be at the bottom?



(A) 3

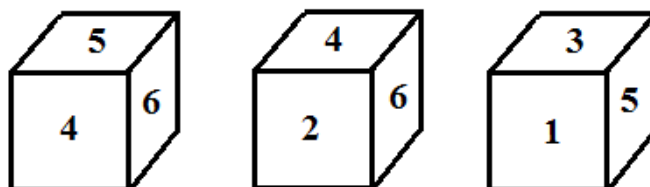
(B) 4

(C) 5

(D) 6

Answer: (D) 6.

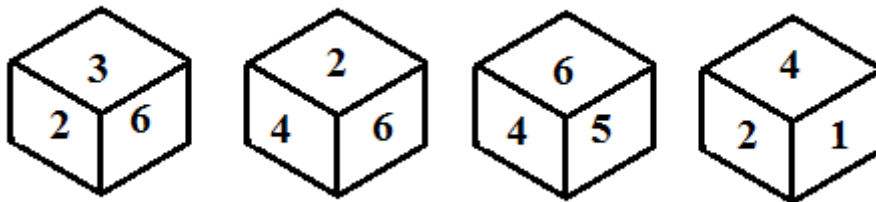
4. In a die given below the number opposite to the number 2 is



- (A) 6
- (B) 5
- (C) 4
- (D) 3

Answer: (B) 5.

5. Consider the following dice

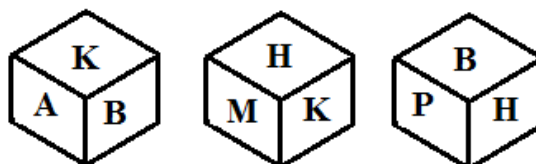


Which is opposite to 3?

- (A) 1
- (B) 4
- (C) 5
- (D) 2

Answer: (B) 4.

6. Three views of a cube are given below. What is the letter opposite to A?



(A) H

(B) P

(C) B

(D) M

Answer: (A) H.

Winmeen